



Good Morning Maple



Friday 20th November 2020

Practise your spellings and handwriting

This week's spellings are


Year 3	Year 4
night	creature
knight	picture
blue	nature
blew	furniture
hole	capture
whole	culture
because	moisture
so	future
that	gesture
or	structure

Guided Reading

Friday 20th November 2020

Reading domain 2f: Identify/explain how information/narrative content is related and contributes to meaning as a whole

What does this mean?



Friday 20th November 2020

Reading domain 2f: Identify/explain how information/narrative content is related and contributes to meaning as a whole

What does this mean?

In non-fiction, this examines how the presentation and organisation of the text contributes to the meaning as a whole.



Read pages 8-9 on the following pages



Get a lifestyle

When the Romans came to Britain they found the tribes treated them in different ways. Some tribes were **hostile** and often attacked the Romans. Other tribes were friendly. They knew that if they **co-operated** with the Romans, the Romans would protect them from their enemies.

There were other benefits for the Celts if they helped the Romans. They could improve their lifestyle by selling things like grain or precious metals such as silver and tin to the Romans.

The Romans admired the Celts' skill at making metal objects such as weapons and other beautifully decorated items.



When the Romans set up local councils to collect taxes and keep law and order, many Celtic chieftains joined them.

After a while, the Celts and Romans lived in peace.

Many Celts began to dress like Romans and follow their customs and habits. Some grew rich and were able to live in Roman-style houses. A lot of people we think of as Romans were actually Celts.



Why are some of the words in bold?

How do the illustrations link to the text?

Why is the title 'Get a Lifestyle' suitable to this part of the text?


What else could the title be?

Match the words to the features

to identify features of a non-fiction text


Elephants!

Elephants are amazing animals. Read on to find out all about them



Fun Facts

- * There are 2 different types of elephant - Asian and African.
- * They suck up water into their trunks and shoot it into their mouths.
- * They can run up to 24mph.



Do you know what elephants eat?
Elephants eat grass, small branches, and bark from trees. They especially like leaves from the top branches. **They get the bark by scraping it with their sharp tusks.**

photograph subheading boxes illustration title bullet points question introduction

SPaG - years 3 and 4

Pronouns can replace nouns in a sentence. Rewrite these sentences using pronouns.

- 1) Ryan needs to read more.

2) Connor and Ashley love to eat sweets.

3) Brenda likes to listen to music.

4) The skateboard is Julian's.

5) Timmy is a good dog.

6) The cake is for John, Jacob and Jack.

7) I am Kate and this is Kane's house.

English - years 3 and 4

Write the ending to your story about the Roman invasion.

[illegible]

[illegible]

Maths - year 3

Can I work out a fraction of an amount?

I can divide by 2 when finding halves.

I can divide by 4 when finding quarters.

I can divide by 3 when finding thirds.



$\frac{1}{2}$



$\frac{1}{4}$



$\frac{1}{3}$

What is $\frac{1}{2}$ of 12?

What is $\frac{1}{4}$ of 12?

What is $\frac{1}{3}$ of 12?

Have a go...

Challenge 1

$\frac{1}{2}$ of 10
 $\frac{1}{2}$ of 6
 $\frac{1}{2}$ of 12
 $\frac{1}{2}$ of 20
 $\frac{1}{4}$ of 8
 $\frac{1}{4}$ of 4

Challenge 2

$\frac{1}{2}$ of 18
 $\frac{1}{3}$ of 18
 $\frac{1}{4}$ of 20
 $\frac{1}{5}$ of 30
 $\frac{1}{4}$ of 32
 $\frac{1}{8}$ of 24

Challenge 3

$\frac{3}{4}$ of 46
 $\frac{2}{3}$ of 36
 $\frac{3}{5}$ of 40
 $\frac{7}{8}$ of 24
 $\frac{2}{3}$ of 15
 $\frac{4}{10}$ of 30

1a. This is $\frac{1}{3}$ of a bag of melons.



How many melons are in the whole bag?



VF

2a. Find $\frac{1}{5}$ of 10 by circling equal groups.



VF

3a. Fill in the gaps to show the calculation this bar model represents.



$$\frac{1}{\square} \text{ of } 10 = \square$$



VF

4a. Find $\frac{1}{2}$ of 10 using place value counters.



VF

Maths year 4

Maths

1. What is $\frac{3}{4}$ of 40?
2. What is $\frac{3}{4}$ of 8?
3. What is $\frac{2}{3}$ of 21?
4. What is $\frac{5}{6}$ of 30?
5. What is $\frac{2}{6}$ of 18?
6. What is $\frac{3}{5}$ of 20?
7. What is $\frac{2}{3}$ of 12?
8. What is $\frac{3}{4}$ of 16?
9. What is $\frac{2}{3}$ of 21?
10. What is $\frac{2}{4}$ of 24?

A chocolate cake is cut into twelve equal pieces. Mr Greedy eats five pieces at break time with his mug of tea. What fraction of the cake is left?

Half of a box of chocolates has been eaten. If the box now has 17 chocolates how many were in the full box?

Spellings year 3



These words all relate to time. Read each one and sort them into two groups on your whiteboards.

February

minute

hour

August

September

Noun

Proper Noun

month

January

July

Friday

year

second

Monday

This week's spellings are the months of the year. They are all **proper nouns**. Practise reading them on the next slide.



Click on each month in the right order to sail the boat home.



Click on the Home island to check your answer.

Here are this week's spellings to practise.

Work hard to learn them, they are tricky!

January

June

February

July

March

August

April

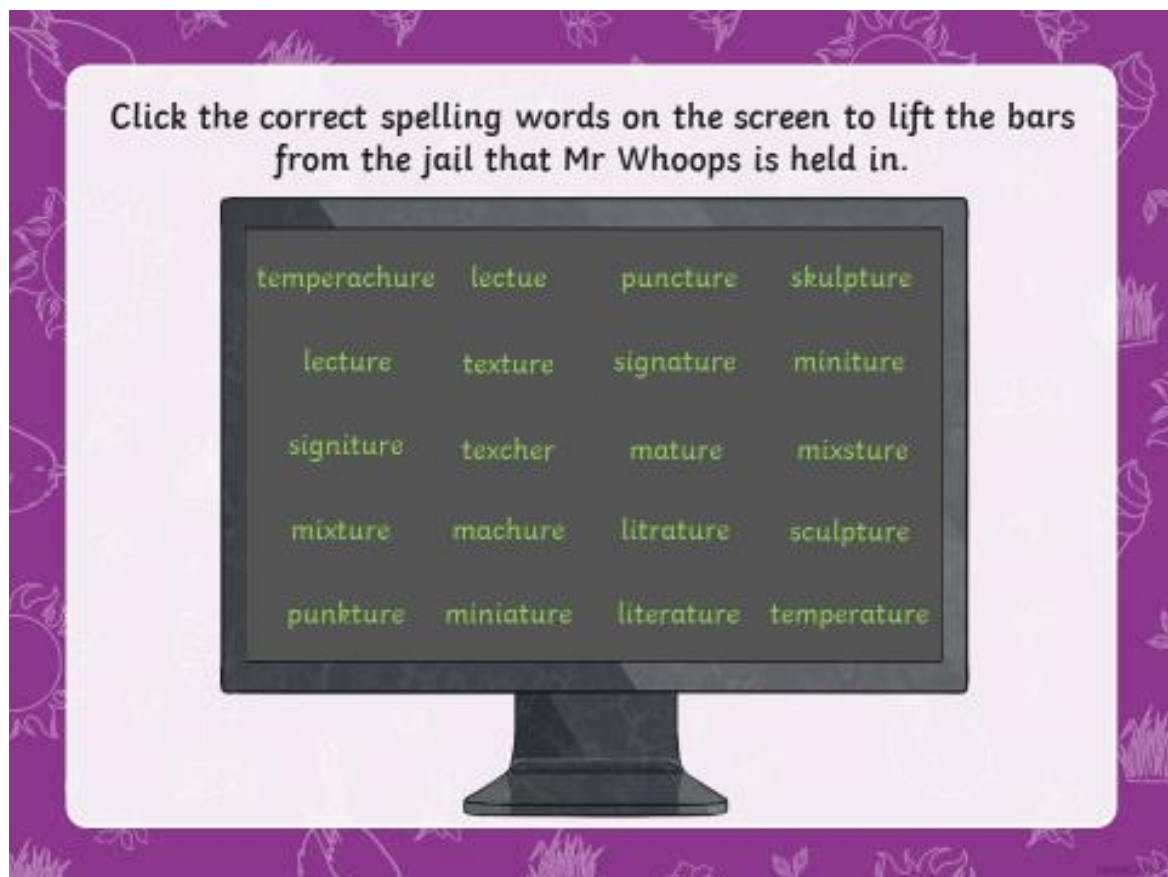
September

May

October



Spellings - year 4



Could you speed-write one of the words ten times in just 30 seconds?

lecture
literature
mature
miniature
mixture
puncture
sculpture
signature
temperature
texture



Start

Can you sort the spellings into word types; which are nouns?
Which are verbs? Which are adjectives?

lecture	puncture
literature	sculpture
mature	signature
miniature	temperature
mixture	texture

Are any of the spellings in more than one word class?

These are your spelling words for this week.

lecture
literature
mature
miniature
mixture
puncture
sculpture
signature
temperature
texture



Reflection

What have you found difficult this week? Write down anything you want to discuss and we will talk about it next week. I am looking forward to seeing you on Tuesday.

Have a great weekend

